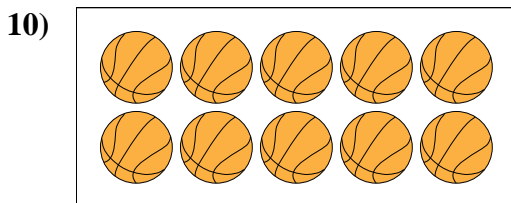
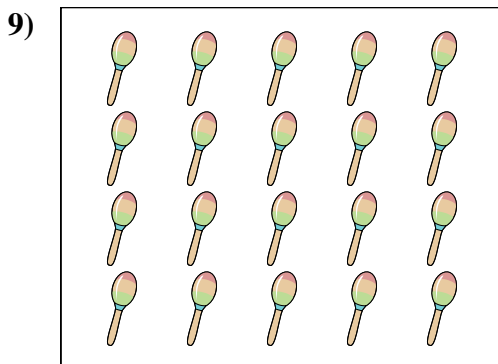
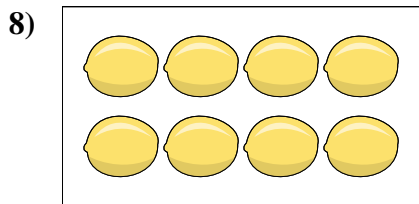
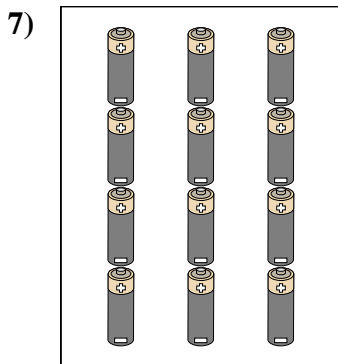
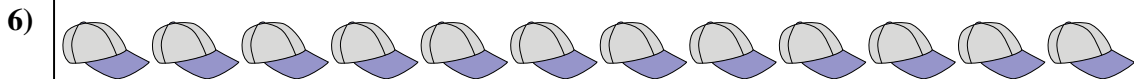




Count the amount of each of the different objects.



Answers

1. \_\_\_\_\_

2. \_\_\_\_\_

3. \_\_\_\_\_

4. \_\_\_\_\_

5. \_\_\_\_\_

6. \_\_\_\_\_

7. \_\_\_\_\_

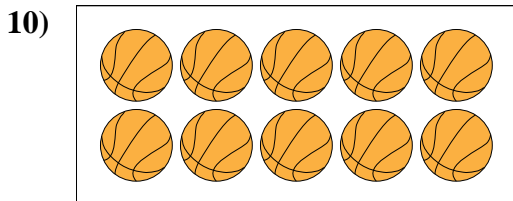
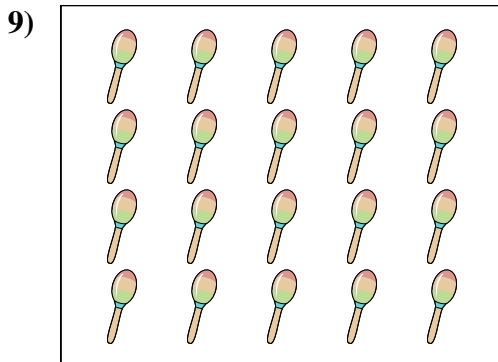
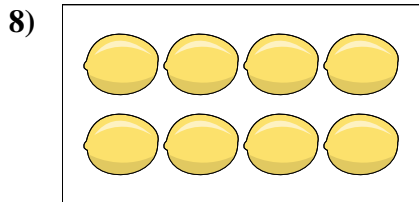
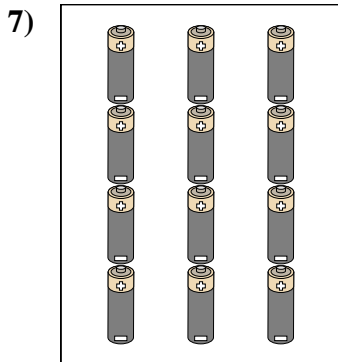
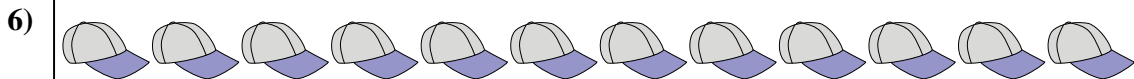
8. \_\_\_\_\_

9. \_\_\_\_\_

10. \_\_\_\_\_



Count the amount of each of the different objects.



Answers

1. 14

2. 14

3. 14

4. 20

5. 14

6. 12

7. 12

8. 8

9. 20

10. 10