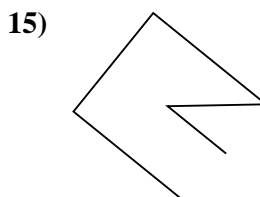
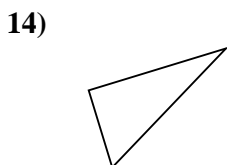
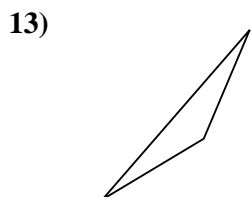
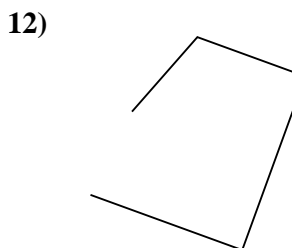
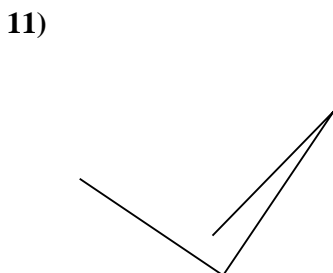
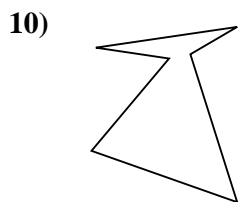
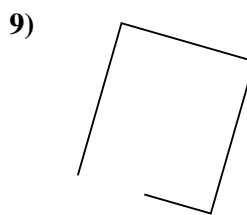
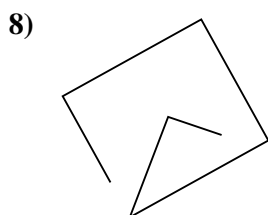
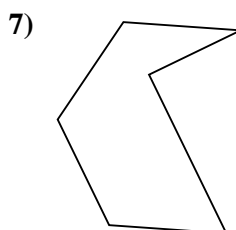
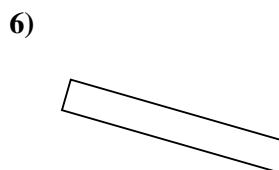
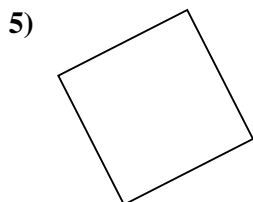
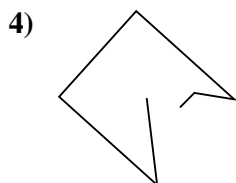
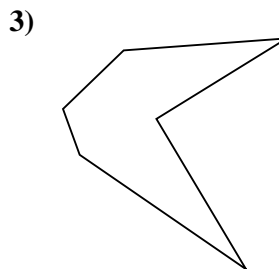
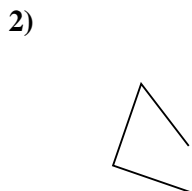
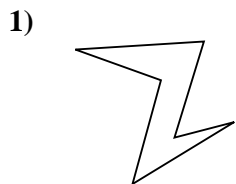




Determine if the figure shown is a 'Triangle', 'Square', 'Rectangle', 'Hexagon' or 'Other'.

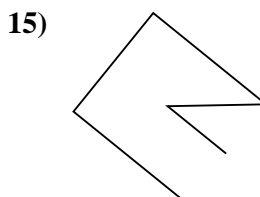
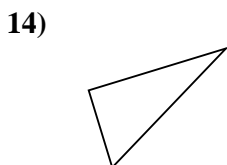
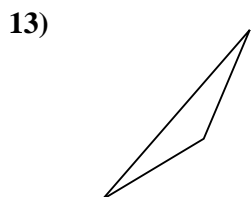
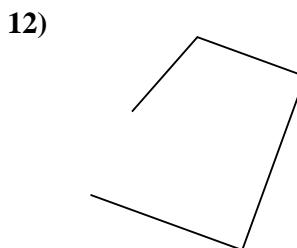
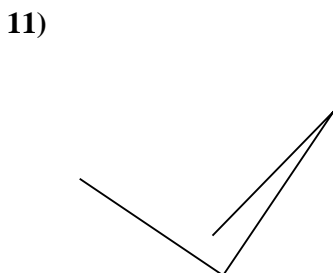
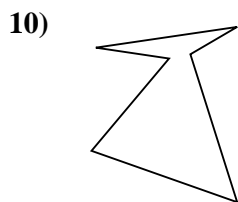
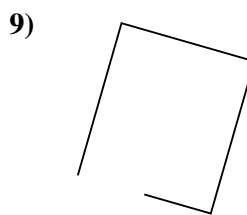
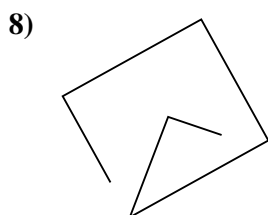
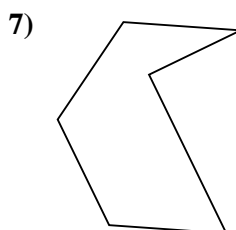
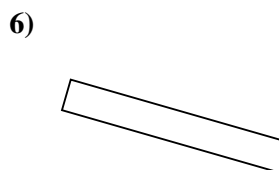
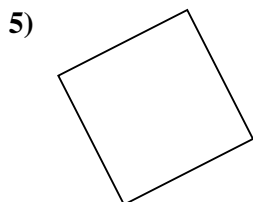
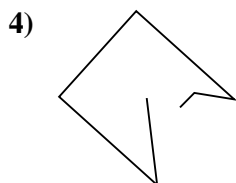
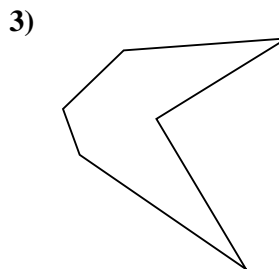
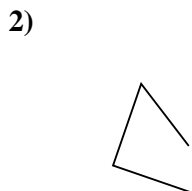
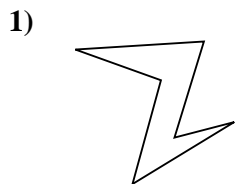
Answers



- 1. _____
- 2. _____
- 3. _____
- 4. _____
- 5. _____
- 6. _____
- 7. _____
- 8. _____
- 9. _____
- 10. _____
- 11. _____
- 12. _____
- 13. _____
- 14. _____
- 15. _____



Determine if the figure shown is a 'Triangle', 'Square', 'Rectangle', 'Hexagon' or 'Other'.



Answers

1. Hexagon

2. Other

3. Hexagon

4. Other

5. Square

6. Rectangle

7. Hexagon

8. Other

9. Other

10. Hexagon

11. Other

12. Other

13. Triangle

14. Triangle

15. Other