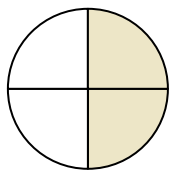




Determine which letter best describes the shaded portion.

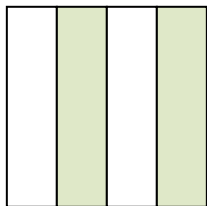
Answers

1)



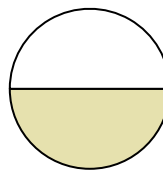
- A. four quarters
- B. two quarters
- C. two halves

2)



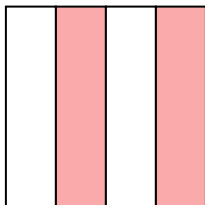
- A. three quarters
- B. two quarters
- C. four quarters

3)



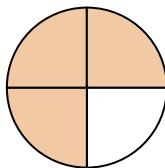
- A. one half
- B. two halves
- C. four-fourths

4)



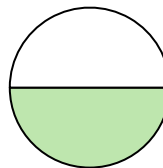
- A. four-fourths
- B. two-fourths
- C. one quarter

5)




- A. one half
- B. two quarters
- C. three-fourths

6)



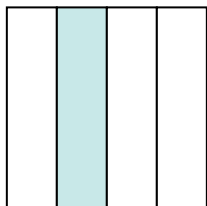
- A. three-fourths
- B. one half
- C. four quarters

7)



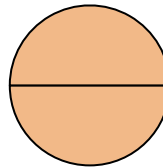
- A. three-fourths
- B. two halves
- C. one half

8)



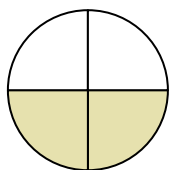
- A. two quarters
- B. three-fourths
- C. one quarter

9)



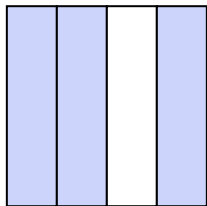
- A. two halves
- B. three quarters
- C. one half

10)



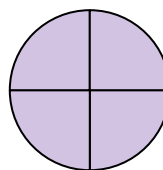
- A. three quarters
- B. one quarter
- C. two-fourths

11)



- A. one half
- B. four quarters
- C. three-fourths

12)



- A. four quarters
- B. one quarter
- C. two quarters

1. _____

2. _____

3. _____

4. _____

5. _____

6. _____

7. _____

8. _____

9. _____

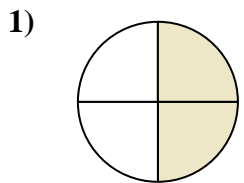
10. _____

11. _____

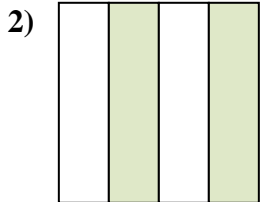
12. _____



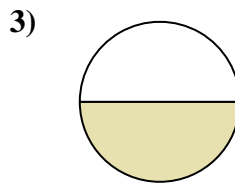
Determine which letter best describes the shaded portion.



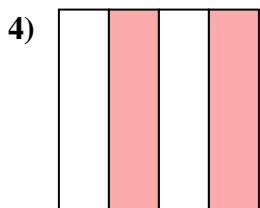
- A. four quarters
- B. two quarters
- C. two halves



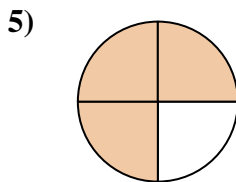
- A. three quarters
- B. two quarters
- C. four quarters



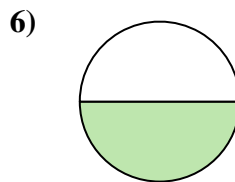
- A. one half
- B. two halves
- C. four-fourths



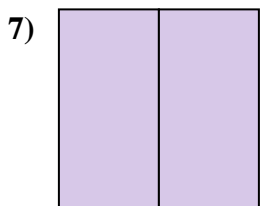
- A. four-fourths
- B. two-fourths
- C. one quarter



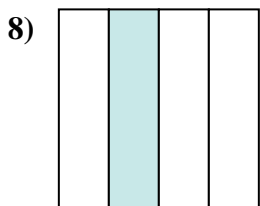
- A. one half
- B. two quarters
- C. three-fourths



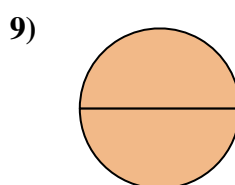
- A. three-fourths
- B. one half
- C. four quarters



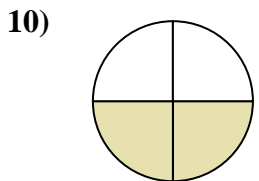
- A. three-fourths
- B. two halves
- C. one half



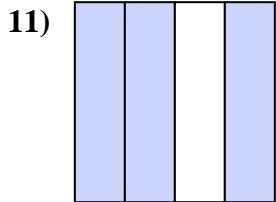
- A. two quarters
- B. three-fourths
- C. one quarter



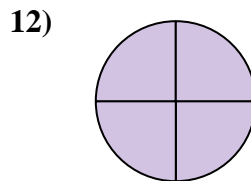
- A. two halves
- B. three quarters
- C. one half



- A. three quarters
- B. one quarter
- C. two-fourths



- A. one half
- B. four quarters
- C. three-fourths



- A. four quarters
- B. one quarter
- C. two quarters

Answers

1. **B**

2. **B**

3. **A**

4. **B**

5. **C**

6. **B**

7. **B**

8. **C**

9. **A**

10. **C**

11. **C**

12. **A**