

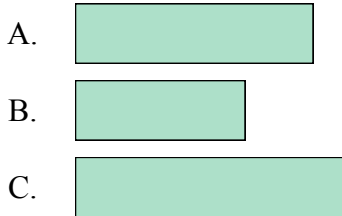


Solve each problem.

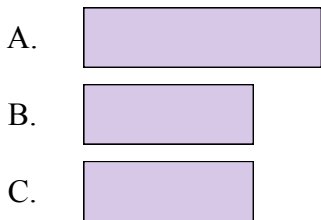
1) Order from shortest to longest.



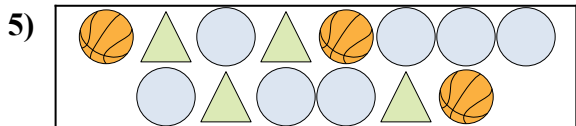
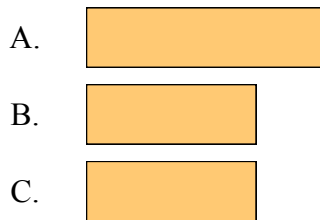
2) Order from shortest to longest.







3) Order from shortest to longest.

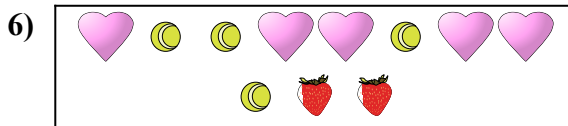




4) Order from shortest to longest.






Are there less  or less  ?



A.  B. 





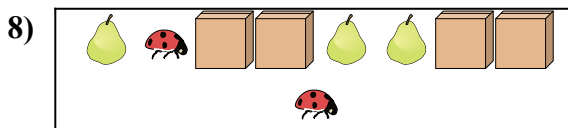
Are there less  or less  ?



A.  B. 





Are there less  or less  ?

A.  B. 



Are there more  or more  ?

A.  B. 

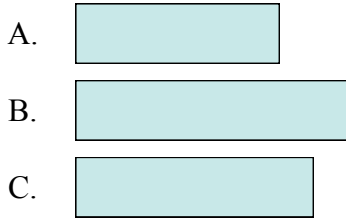
Answers

1. _____
2. _____
3. _____
4. _____
5. _____
6. _____
7. _____
8. _____

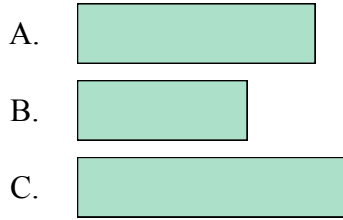


Solve each problem.

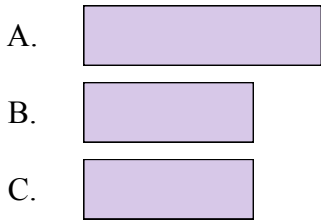
1) Order from shortest to longest.



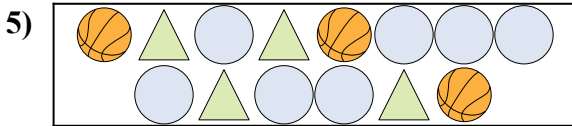
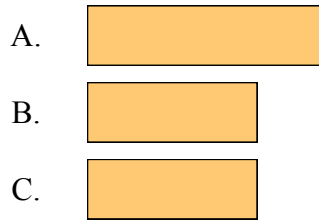
2) Order from shortest to longest.







3) Order from shortest to longest.






4) Order from shortest to longest.






Are there less  or less  ?



A.  B. 






Are there less  or less  ?



A.  B. 





Are there less  or less  ?

A.  B. 



Are there more  or more  ?

A.  B. 

Answers

1. **A, C, B**
2. **B, A, C**
3. **B, B, A**
4. **B, B, A**
5. **B**
6. **A**
7. **B**
8. **B**