

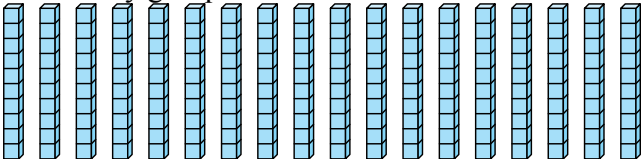
Solve each problem.

1) Write a number with:
1 hundred, 2 ones, 9 tens

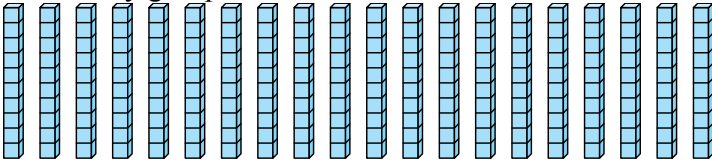
2) Write a number with:
3 ones, 7 tens, 6 hundreds

3) Write a number with:
5 tens, 4 ones, 7 hundreds

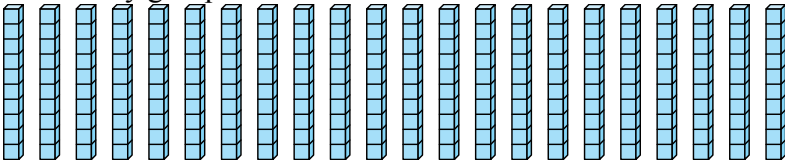
4) How many groups of 100 can be created from the blocks shown.



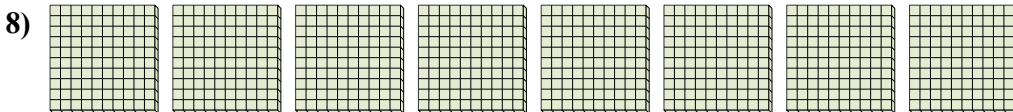
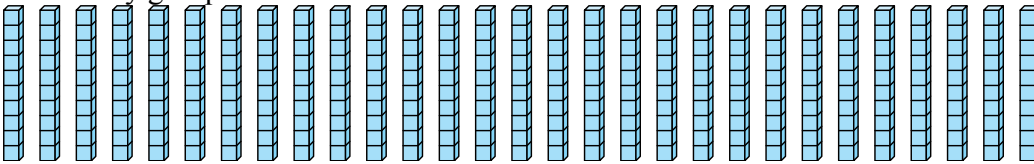
5) How many groups of 100 can be created from the blocks shown.



6) How many groups of 100 can be created from the blocks shown.



7) How many groups of 100 can be created from the blocks shown.



- a. How many groups of 100 are there?
- b. How many small blocks are there total?

Answers

1. _____

2. _____

3. _____

4. _____

5. _____

6. _____

7. _____

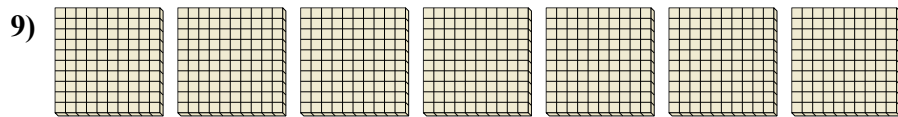
8. _____

9. _____

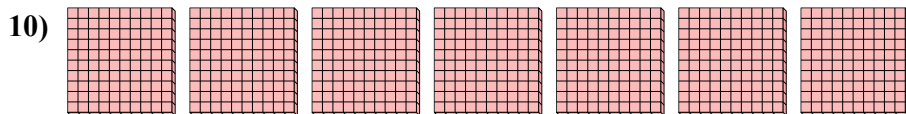
10. _____



Name: _____



- a. How many groups of 100 are there?
- b. How many small blocks are there total?



- a. How many groups of 100 are there?
- b. How many small blocks are there total?



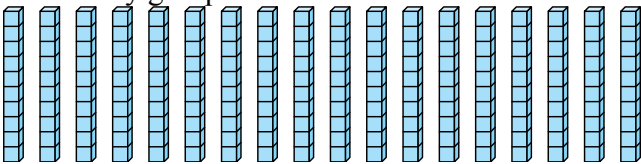
Solve each problem.

1) Write a number with:
1 hundred, 2 ones, 9 tens

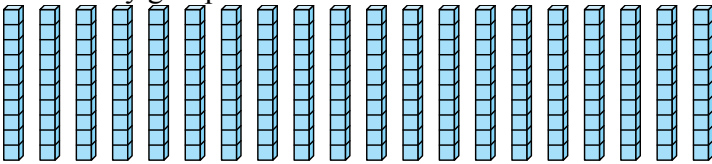
2) Write a number with:
3 ones, 7 tens, 6 hundreds

3) Write a number with:
5 tens, 4 ones, 7 hundreds

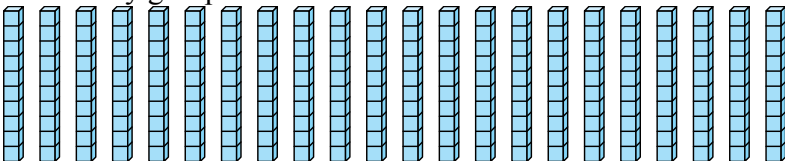
4) How many groups of 100 can be created from the blocks shown.



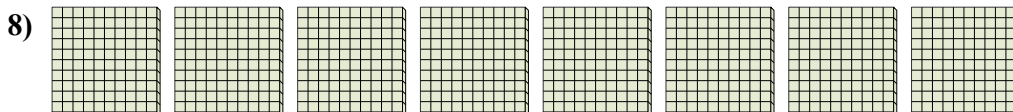
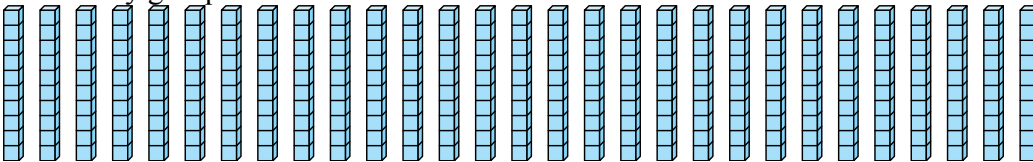
5) How many groups of 100 can be created from the blocks shown.



6) How many groups of 100 can be created from the blocks shown.



7) How many groups of 100 can be created from the blocks shown.

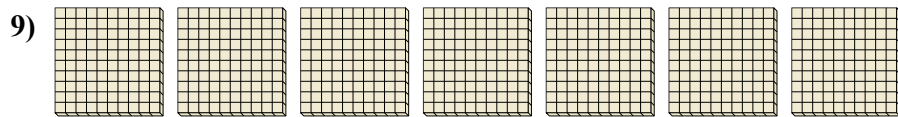


- a. How many groups of 100 are there?
b. How many small blocks are there total?

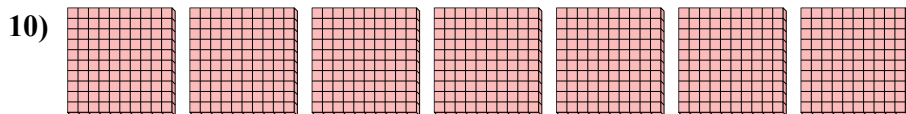
Answers1. 1922. 6733. 7544. 15. 26. 27. 28. 8 8009. 7 70010. 7 700



Name: _____



- a. How many groups of 100 are there?
- b. How many small blocks are there total?



- a. How many groups of 100 are there?
- b. How many small blocks are there total?