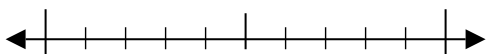


**Solve each problem.**

1) Round 94,713 to the nearest ten.

2) Find the value of K.
 $512 - 398 = K$ 3) Find the value of M.
 $988 = M + 224$ 4) Find the value of Z.
 $549 = 565 - Z$

5) Use the numberline to round 786 to the nearest ten.



6) Isabel was preparing for a marathon. In the morning she jogged 155 meters, in the afternoon she jogged another 602 meters and that night she jogged 825 meters. How many meters did she jog total?

7) Nancy was preparing for a marathon. In the morning she jogged 468 meters, in the afternoon she jogged another 406 meters and that night she jogged 648 meters. How many meters did she jog total?

8) Three friends were counting the number of texts they sent in a month. Alex sent 174, Sam sent 497 and Jessie sent 914. What is the combined amount of texts the three friends sent?

9) Use the numberline to round 641 to the nearest 100.



10) A zoo used 55 pounds of food each day. Which expression shows the amount of food they'd have used after 99 days?

A. 60×90 B. 50×90 C. 60×100 D. 50×100 **Answers**

1. _____

2. _____

3. _____

4. _____

5. _____

6. _____

7. _____

8. _____

9. _____

10. _____

11. _____

12. _____



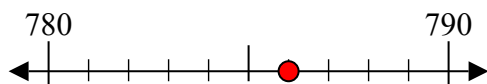
- 11) Adam had 42 music albums on his computer. If each album was 39 minutes long, which expression shows about how many minutes of music he had?
- A. 40×30 B. 50×40 C. 50×30 D. 40×40
- 12) Lana was reading a book with 96 chapters. If each chapter was 16 pages, which expression shows about the length of the book?
- A. 90×10 B. 100×10 C. 90×20 D. 100×20

**Solve each problem.**

1) Round 94,713 to the nearest ten.

2) Find the value of K.
 $512 - 398 = K$ 3) Find the value of M.
 $988 = M + 224$ 4) Find the value of Z.
 $549 = 565 - Z$

5) Use the numberline to round 786 to the nearest ten.

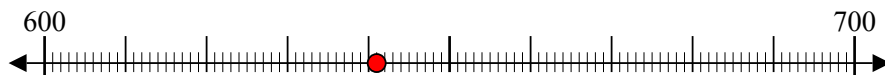


6) Isabel was preparing for a marathon. In the morning she jogged 155 meters, in the afternoon she jogged another 602 meters and that night she jogged 825 meters. How many meters did she jog total?

7) Nancy was preparing for a marathon. In the morning she jogged 468 meters, in the afternoon she jogged another 406 meters and that night she jogged 648 meters. How many meters did she jog total?

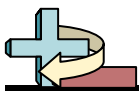
8) Three friends were counting the number of texts they sent in a month. Alex sent 174, Sam sent 497 and Jessie sent 914. What is the combined amount of texts the three friends sent?

9) Use the numberline to round 641 to the nearest 100.



10) A zoo used 55 pounds of food each day. Which expression shows the amount of food they'd have used after 99 days?

A. 60×90 B. 50×90 C. 60×100 D. 50×100 **Answers**1. 94,7102. 1143. 7644. 165. 7906. 1,5827. 1,5228. 1,5859. 60010. C11. D12. D



- 11) Adam had 42 music albums on his computer. If each album was 39 minutes long, which expression shows about how many minutes of music he had?
- A. 40×30 B. 50×40 C. 50×30 D. 40×40
- 12) Lana was reading a book with 96 chapters. If each chapter was 16 pages, which expression shows about the length of the book?
- A. 90×10 B. 100×10 C. 90×20 D. 100×20