



**Solve each problem.**

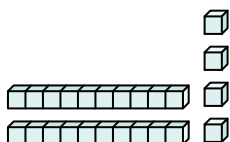
1) Write a number with eight tens and seven ones.

2) Write a number with five tens and four ones.

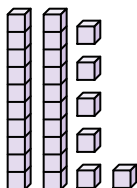
3) Write a number with four tens and seven ones.

4) Write a number with two tens and three ones.

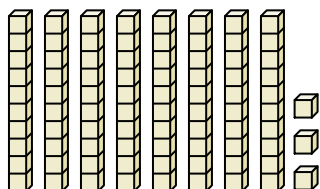
5) What amount is shown below?




6) What amount is shown below?



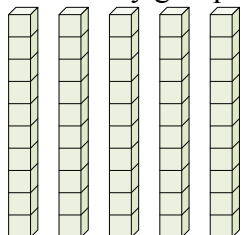
7) What amount is shown below?



8) How many groups of ten are there below? How many smaller blocks?



9) How many groups of ten are there below? How many smaller blocks?



**Answers**

1. \_\_\_\_\_

2. \_\_\_\_\_

3. \_\_\_\_\_

4. \_\_\_\_\_

5. \_\_\_\_\_

6. \_\_\_\_\_

7. \_\_\_\_\_

8. \_\_\_\_\_

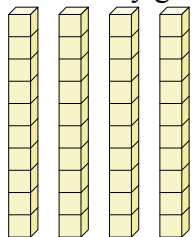
9. \_\_\_\_\_

10. \_\_\_\_\_



Name: \_\_\_\_\_

10) How many groups of ten are there below? How many smaller blocks?



**Solve each problem.**

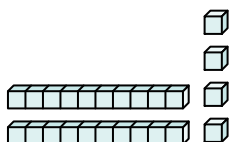
1) Write a number with eight tens and seven ones.

2) Write a number with five tens and four ones.

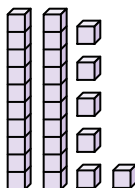
3) Write a number with four tens and seven ones.

4) Write a number with two tens and three ones.

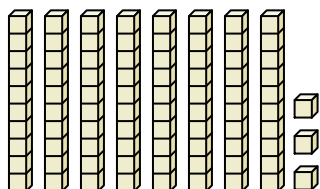
5) What amount is shown below?




6) What amount is shown below?



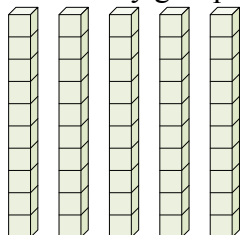
7) What amount is shown below?

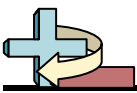


8) How many groups of ten are there below? How many smaller blocks?



9) How many groups of ten are there below? How many smaller blocks?

**Answers**1. 872. 543. 474. 235. 246. 267. 838. 5      509. 5      5010. 4      40



Name: \_\_\_\_\_

10) How many groups of ten are there below? How many smaller blocks?

