

**Solve each problem.****Answers**

1) Write a number with:  
7 ones, 9 tens, 3 hundreds

2) Write as a numeral:  
 $200 + 60 + 5$

1. \_\_\_\_\_

3) Write as a numeral:  
 $70 + 1$

4) Write as a numeral:  
 $800 + 50 + 8$

2. \_\_\_\_\_

5) Write as a numeral:  
five hundred seventy-eight

6) Write as a numeral:  
four hundred thirty-six

3. \_\_\_\_\_

4. \_\_\_\_\_

5. \_\_\_\_\_

6. \_\_\_\_\_

7) Write as a numeral:  
fourteen

7. \_\_\_\_\_

8. \_\_\_\_\_

8) Count by 10s:      647 , 657 , 667 , 677 , \_\_\_\_\_

9. \_\_\_\_\_

10. \_\_\_\_\_

9) Count by 5s:      555 , 560 , 565 , 570 , 575 , \_\_\_\_\_

11. **Use Line**12. **Use Line**

10) Start at 521 and count up 3 times by hundreds.

13. **Use Line**

11) Write in word form: 13

\_\_\_\_\_

14. **Use Line**15. **Use Line**

12) Write in word form: 567

\_\_\_\_\_

16. **Use Line**

17. \_\_\_\_\_

13) Write in word form: 792

\_\_\_\_\_

18. \_\_\_\_\_



Name: \_\_\_\_\_

14) Write in expanded form: 49

\_\_\_\_\_

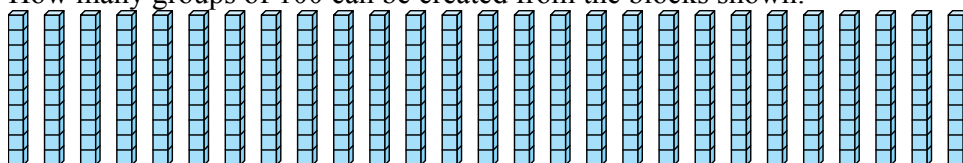
15) Write in expanded form: 629

\_\_\_\_\_

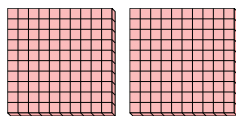
16) Write in expanded form: 672

\_\_\_\_\_

17) How many groups of 100 can be created from the blocks shown.



18)



- a. How many groups of 100 are there?
- b. How many small blocks are there total?

**Solve each problem.****Answers**1) Write a number with:  
7 ones, 9 tens, 3 hundreds2) Write as a numeral:  
 $200 + 60 + 5$ 1. 3973) Write as a numeral:  
 $70 + 1$ 4) Write as a numeral:  
 $800 + 50 + 8$ 2. 2653. 715) Write as a numeral:  
five hundred seventy-eight6) Write as a numeral:  
four hundred thirty-six4. 8585. 5787) Write as a numeral:  
fourteen6. 4367. 148) Count by 10s: 647, 657, 667, 677, 6878. 6879. 5809) Count by 5s: 555, 560, 565, 570, 575, 58010. 82111. Use Line

10) Start at 521 and count up 3 times by hundreds.

12. Use Line13. Use Line

11) Write in word form: 13

thirteen14. Use Line15. Use Line

12) Write in word form: 567

five hundred sixty-seven16. Use Line17. 2

13) Write in word form: 792

seven hundred ninety-two18. 2     200



Name: \_\_\_\_\_

14) Write in expanded form: 49

---

$$40 + 9$$

15) Write in expanded form: 629

---

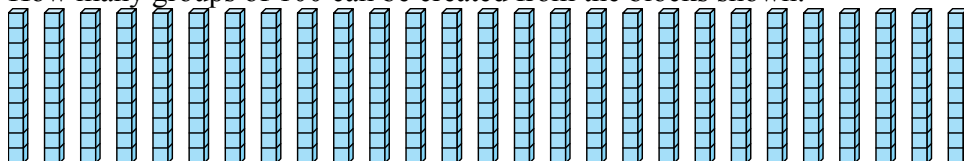
$$600 + 20 + 9$$

16) Write in expanded form: 672

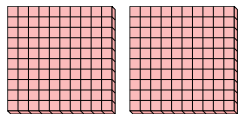
---

$$600 + 70 + 2$$

17) How many groups of 100 can be created from the blocks shown.



18)



- How many groups of 100 are there?
- How many small blocks are there total?