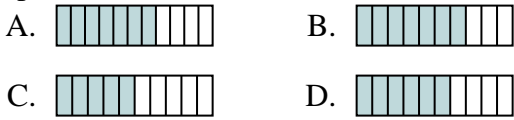


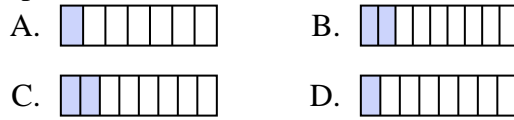
Determine which choice best answers each question.

Answers

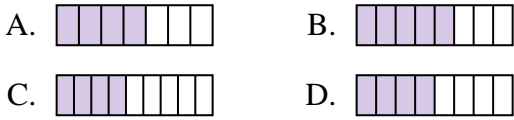
1) Which of the shapes below is shaded to represent $\frac{6}{10}$?



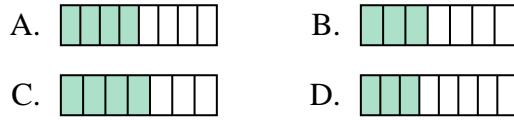
2) Which of the shapes below is shaded to represent $\frac{2}{8}$?



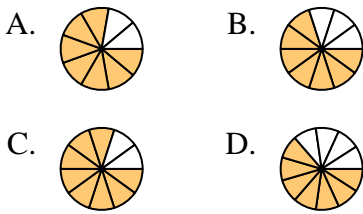
3) Which of the shapes below is shaded to represent $\frac{4}{8}$?



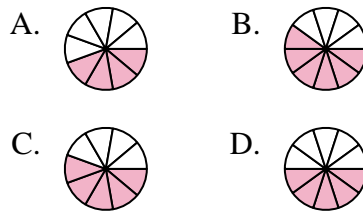
4) Which of the shapes below is shaded to represent $\frac{3}{7}$?



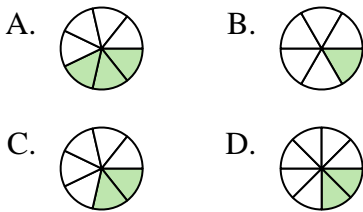
5) Which of the shapes below is shaded to represent $\frac{7}{10}$?



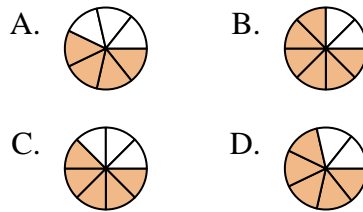
6) Which of the shapes below is shaded to represent $\frac{5}{10}$?



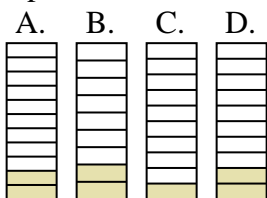
7) Which of the shapes below is shaded to represent $\frac{2}{7}$?



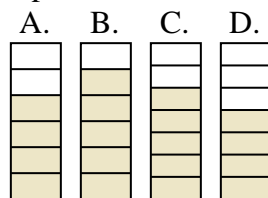
8) Which of the shapes below is shaded to represent $\frac{5}{8}$?



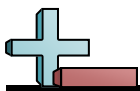
9) Which of the shapes below is shaded to represent $\frac{2}{10}$?



10) Which of the shapes below is shaded to represent $\frac{5}{7}$?

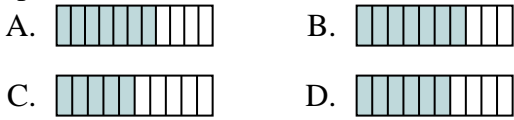


1. _____
2. _____
3. _____
4. _____
5. _____
6. _____
7. _____
8. _____
9. _____
10. _____

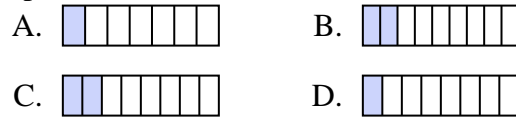


Determine which choice best answers each question.

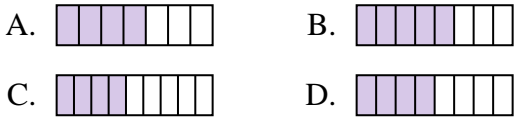
1) Which of the shapes below is shaded to represent $\frac{6}{10}$?



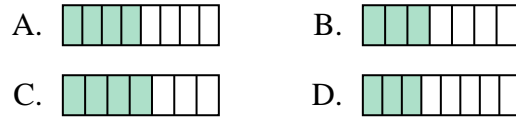
2) Which of the shapes below is shaded to represent $\frac{2}{8}$?



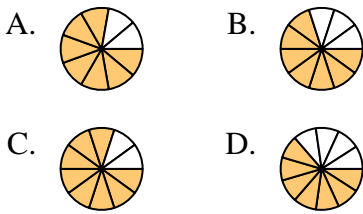
3) Which of the shapes below is shaded to represent $\frac{4}{8}$?



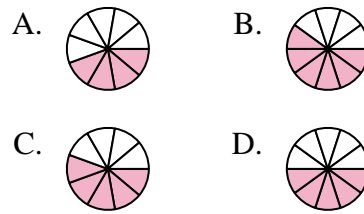
4) Which of the shapes below is shaded to represent $\frac{3}{7}$?



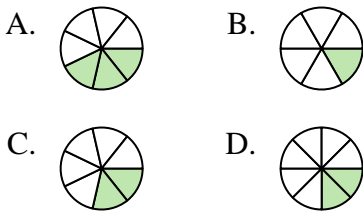
5) Which of the shapes below is shaded to represent $\frac{7}{10}$?



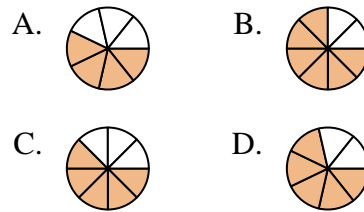
6) Which of the shapes below is shaded to represent $\frac{5}{10}$?



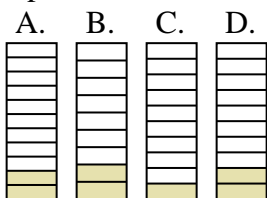
7) Which of the shapes below is shaded to represent $\frac{2}{7}$?



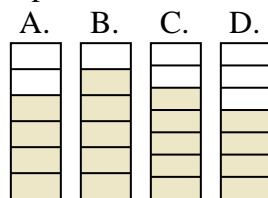
8) Which of the shapes below is shaded to represent $\frac{5}{8}$?



9) Which of the shapes below is shaded to represent $\frac{2}{10}$?



10) Which of the shapes below is shaded to represent $\frac{5}{7}$?



Answers

1. **D**
2. **C**
3. **D**
4. **B**
5. **B**
6. **D**
7. **C**
8. **C**
9. **D**
10. **C**