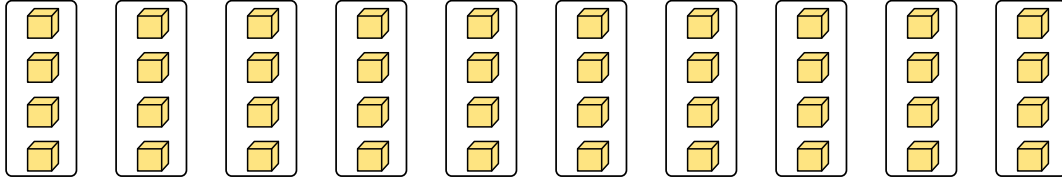





Express each set as a multiplication problem.

Answers

Ex) 

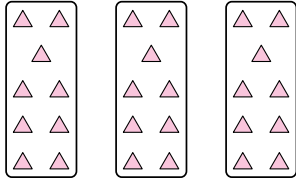
Ex. $10 \cdot 4 = 40$

1) 

1. _____

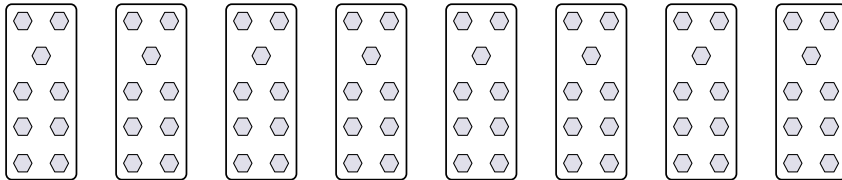
2. _____

3. _____

2) 

4. _____


5. _____


3) 


6. _____


7. _____

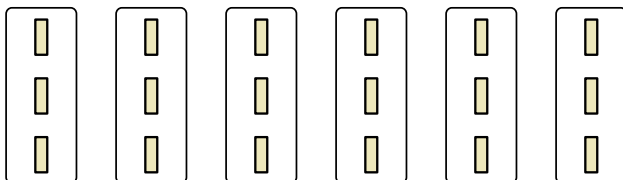
8. _____

4) 

5) 

6) 

7) 

8) 



Express each set as a multiplication problem.

Ex)

1)

2)

3)

4)

5)

6)

7)

8)

Answers

Ex. $10 \cdot 4 = 40$

1. $5 \cdot 9 = 45$

2. $3 \cdot 9 = 27$

3. $8 \cdot 9 = 72$

4. $4 \cdot 4 = 16$

5. $6 \cdot 2 = 12$

6. $5 \cdot 2 = 10$

7. $10 \cdot 7 = 70$

8. $6 \cdot 3 = 18$